

**LES 22**

**Optellen en aftrekken tot 10 000**

**1** Kijk goed en los op.

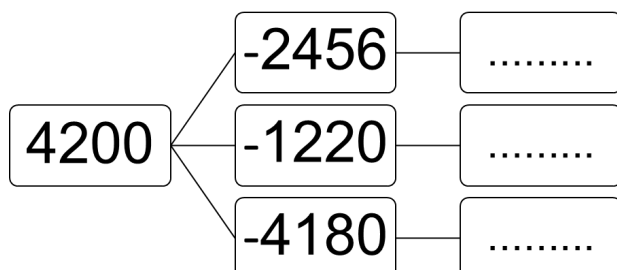
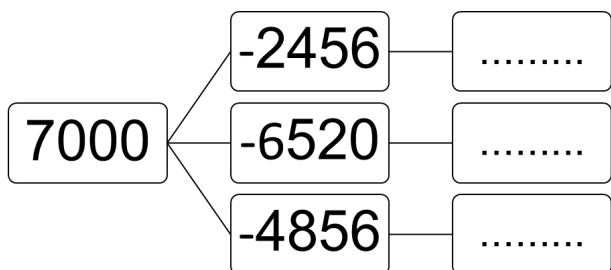
$16 + 9 = \dots\dots\dots$   
 $160 + 90 = \dots\dots\dots$   
 $1600 + 900 = \dots\dots\dots$   
 $1620 + 900 = \dots\dots\dots$   
 $1620 + 940 = \dots\dots\dots$

$36 - 8 = \dots\dots\dots$   
 $360 - 80 = \dots\dots\dots$   
 $3600 - 800 = \dots\dots\dots$   
 $3640 - 800 = \dots\dots\dots$   
 $3640 - 810 = \dots\dots\dots$

$18 + 5 = \dots\dots\dots$   
 $180 + 50 = \dots\dots\dots$   
 $1800 + 500 = \dots\dots\dots$   
 $1840 + 500 = \dots\dots\dots$   
 $1840 + 520 = \dots\dots\dots$

$85 - 7 = \dots\dots\dots$   
 $850 - 70 = \dots\dots\dots$   
 $8500 - 700 = \dots\dots\dots$   
 $8570 - 700 = \dots\dots\dots$   
 $8570 - 770 = \dots\dots\dots$

**2** Vul het verschil in.



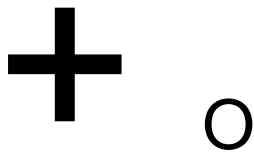
**3** Los op.

$10 - 6 = \dots\dots\dots$   
 $80 - 6 = \dots\dots\dots$   
 $120 - 6 = \dots\dots\dots$   
 $1200 - 6 = \dots\dots\dots$   
 $1200 - 60 = \dots\dots\dots$

$10 - 8 = \dots\dots\dots$   
 $70 - 8 = \dots\dots\dots$   
 $190 - 8 = \dots\dots\dots$   
 $1900 - 8 = \dots\dots\dots$   
 $1900 - 80 = \dots\dots\dots$

$10 - 3 = \dots\dots\dots$   
 $40 - 3 = \dots\dots\dots$   
 $130 - 3 = \dots\dots\dots$   
 $1300 - 3 = \dots\dots\dots$   
 $1300 - 30 = \dots\dots\dots$

**4** Verbind de tekst met de juiste bewerking.



- Wat is de som
- Doe erbij
- Trek er af
- Verminder
- Tel erbij
- Wat is het verschil
- Vermeerder
- Neem minder
- Neem weg
- Doe er af

**5** Tel met sprongen.

2450	.....	.....	.....	.....	.....	.....	.....	.....	.....
+ 500									

3825	.....	.....	.....	.....	.....	.....	.....	.....	.....
+ 25									

8741	.....	.....	.....	.....	.....	.....	.....	.....	.....
- 200									

9450	.....	.....	.....	.....	.....	.....	.....	.....	.....
- 20									